

Name: _____

Class: _____

Year 1

Remote Learning Booklet



Week 10, Term 3

Monday 13th September - Friday 17th September

Trigraphs – air, ear, are

1. Copy each list word.

air _____	pear _____	chair _____
ear _____	pair _____	share _____
fair _____	dear _____	stair _____
dare _____	care _____	spare _____
fear _____	near _____	smear _____
hair _____	year _____	spear _____
hear _____	wear _____	

2. Complete the word. Fill in the letters to make the list word.

c _ _ _

y _ _ _

a _ _

n _ _ _

sh _ _ _

sm _ _ _

3. Label it.



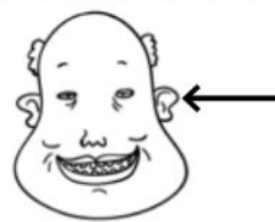
c _____



p _____



h _____



e _____

4. Fill in the words.

She brushed her h_____.

I h_____ with my ear.

I d_____ you to climb higher.

My puppy is d_____ to me.





Trigraphs – air, ear, are

Challenge words

5. Copy each challenge word.

beard	_____	weary	_____
scared	_____	nearby	_____
fairy	_____	square	_____
upstairs	_____	nightmare	_____
repair	_____	parent	_____

6. Interesting question. Answer the questions using a challenge word.

What is something you feel? _____

What is a magical creature with wings? _____

Your mother is your? _____

What is the hair on a man's face called? _____

What is a four sided shape? _____

What do you call a bad dream? _____

7. Acrostic poem. Write an acrostic poem using the word **beard**.

Name: _____

Date: _____

ck

sick _____

rock _____

back _____

tick _____



neck _____

quick _____

truck

pack _____

truck _____



rock



ti__



ne__



ba__



pack

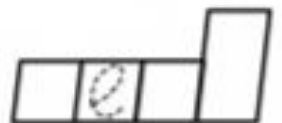

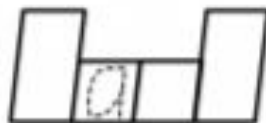
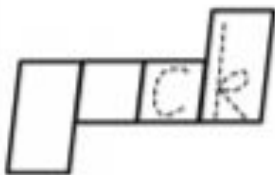


si__

qui__



tru__



Pack the bags quickly.




Pack

Name: _____

Write 5 '-ck' words and draw the pictures. **ON THE BACK**

Circle the '-ck' sounds in the sentences.
Write five of the '-ck' words again.




1. The clock went tick, tock.
2. Can you lock the back door?
3. The black truck was on the track.
4. Good luck with your new truck.
5. Pack your bag and put it on the deck.

ck
ck
ck
ck
ck

Join the '-ck' sound to the correct beginnings. Write the words again.

le do be pe -ck la ra mu ti



duck

peck

Find the '-ck' words in the puzzle.

t	o	v	a	r	q	c	v	r	u	o
z	z	t	k	i	a	t	h	i	c	k
y	b	c	y	c	q	d	r	o	c	k
o	i	k	q	a	o	t	r	u	c	k
k	c	a	n	s	m	h	l	i	e	z
o	m	s	b	i	i	p	s	a	c	k




sack

truck
pluck
sick
thick
rock
shock
sack
kick
snack

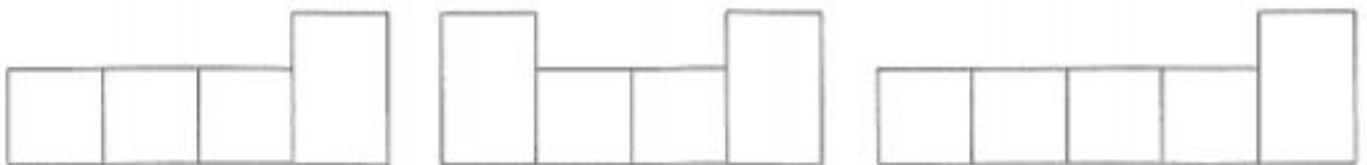
Circle the "ck" sounds.

The postie has a sack on his back.

Pick "ck" words to pack in the postie's sack.



Choose words to match the shapes.



THE PLANETS

The eight planets

There are eight planets that travel around the Sun.

The closest planets are Mercury, Venus, Earth and Mars. These are the rocky planets.

The next four planets are Jupiter, Saturn, Uranus and Neptune. They are the gas planets. Uranus and Neptune are the most far away from the Sun.

Earth

Earth is the third planet from the Sun. Earth is the planet that we live on. It is the only planet with air that we can breathe.

Mercury and Venus

Mercury and Venus are both made of rock.

Mercury is the closest planet to the Sun. It is covered in craters (holes).

Venus is the second planet from the Sun. Venus has many volcanoes.

Mars

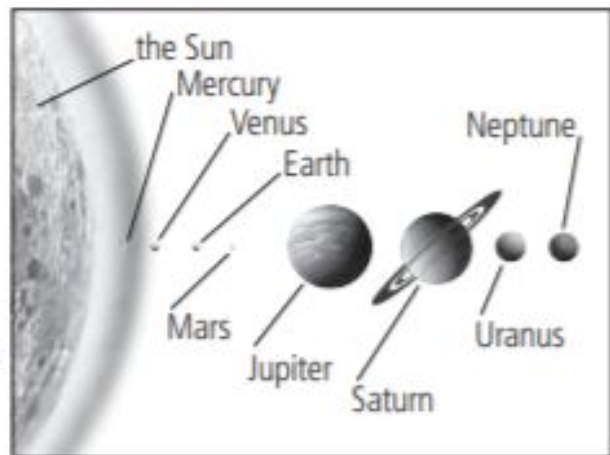
Mars is a red planet made of rock. Winds on Mars cause huge dust storms.

Jupiter and Saturn

Jupiter and Saturn are huge, gas planets. Jupiter is the largest planet and it spins the fastest.

Uranus and Neptune

Uranus and Neptune are the outermost planets. Uranus and Neptune are blue planets.



Text sourced from: Comprehension and Writing Response Centres, Victoria Hazell & Fiona Jackson

Read the text and shade a bubble or write an answer to each question.

1 How many planets travel around the Sun? IDENTIFYING DETAIL

2 Which planet is close to the Sun? IDENTIFYING DETAIL

- Earth Jupiter Neptune Saturn

3 Earth, Mars, Venus and Mercury are known as the warm planets. PREDICTING

- True False

4 Can you name one of the gas planets? QUESTIONING

5 Which planet is furthest away from the Sun? IDENTIFYING DETAIL

- Neptune Mars Jupiter Earth

6 Which planet is the only one with air we can breathe? MONITORING

7 Venus has many volcanoes. PREDICTING

- True False

8 Jupiter spins the fastest. PREDICTING

- True False

9 It would be easy to breathe on Jupiter or Saturn because they are made of gas. PREDICTING

- True False

10 Choose the correct answer. QUESTIONING

- Mercury has many volcanoes.
 Venus is the third planet from the Sun.
 Mars is a red planet made from rock.
 There are seven planets that travel around the Sun.

NUMBER OF CORRECT ANSWERS

10

Red Beard the Pirate

Stanley is the captain on a pirate ship.

Everyone calls him Captain Red Beard.

The pirate ship is called The Black Beast.

The Black Beast has a very colourful crew.

Loud Lizzie is first mate.

Bones, the sea dog, is in charge of the lookout.

Fingers, the parrot, keeps her eyes on the treasure maps.

Captain Red Beard loves sailing the high seas.

He likes it when the seas are big and rough.

Captain Red Beard loves meeting other pirates.

They are not always pleased to see him.

Captain Red Beard loves giving orders.

Captain Red Beard loves swinging in his hammock, and singing pirate songs.

He does not sing at all well.

Captain Red Beard loves sharing pirate stories over dinner, while he shines his pirate boots.

Captain Red Beard loves making up new pirate sayings like, "Flying cannonballs".

Captain Red Beard loves shooting the cannons and flying his pirate flag.

Do you know what Captain Red Beard loves most of all?

He loves finding treasure.

The Black Beast sails and sails and sails.

The crew sails night and day, day and night.

Captain Red Beard needs to learn how to read a map!

Read the text and shade a bubble or write an answer to each question.

1 What is Stanley's other name? IDENTIFYING DETAIL

2 What is his job? MONITORING

3 The pirate ship is called the Black Bear. IDENTIFYING DETAIL

True False

4 Who is the first mate? IDENTIFYING DETAIL

5 Bones, the sea dog, is in charge of the . PREDICTING

6 Fingers, the parrot, has an important job. PREDICTING

True False

7 Captain Red Beard hates the big rolling waves because he gets sea sick. MONITORING

True False

8 Write down two things that Captain Red Beard loves doing. SUMMARISING

9 Captain Red Beard loves sailing the high seas and finding . PREDICTING

10 The crew has to sail a lot because Captain Red Beard often gets lost. PREDICTING


True False

NUMBER OF CORRECT ANSWERS

Addition Speed Challenge + 5

Name _____

+ 5 Set 6	+ 5 Set 7	+ 5 Set 8	+ 5 Set 9	+ 5 Set 10
$5 + 18 =$	$16 + 5 =$	$28 + 5 =$	$21 + 5 =$	$21 + 5 =$
$5 + 22 =$	$21 + 5 =$	$26 + 5 =$	$18 + 5 =$	$5 + 24 =$
$23 + 5 =$	$26 + 5 =$	$5 + 18 =$	$5 + 23 =$	$27 + 5 =$
$17 + 5 =$	$5 + 23 =$	$15 + 5 =$	$5 + 21 =$	$19 + 5 =$
$13 + 5 =$	$5 + 19 =$	$27 + 5 =$	$25 + 5 =$	$5 + 29 =$
$14 + 5 =$	$24 + 5 =$	$26 + 5 =$	$12 + 5 =$	$18 + 5 =$
$5 + 24 =$	$15 + 5 =$	$12 + 5 =$	$27 + 5 =$	$14 + 5 =$
$23 + 5 =$	$5 + 14 =$	$5 + 14 =$	$29 + 5 =$	$5 + 12 =$
$25 + 5 =$	$18 + 5 =$	$29 + 5 =$	$5 + 28 =$	$17 + 5 =$
$5 + 23 =$	$23 + 5 =$	$11 + 5 =$	$13 + 5 =$	$16 + 5 =$
Time:	Time:	Time:	Time:	Time:
Score:	Score:	Score:	Score:	Score:



How Much Money Is in My Jar?







Name _____

Date _____


Creating a Graph (B)

- 1 Mary surveyed the children in her class, asking them what their favourite pet was.

dog			
cat			

fish			
turtle			

Favourite Pets



a) Complete the bar graph by using the tally marks in the above table.

b) What is the most popular pet?





















c) What is the least favourite pet?


d) Did more children prefer cats to dogs?

e) How many children are in Mary's class?

How Many Flies Did Each Frog Eat? - Picture Graph






The hungry frogs are eating flies on the pond. Look at the picture graph and the key below. Count the number of flies that each frog ate.

Green Frog 					
Red Frog 					
Purple Frog 					
Blue Frog 					
Yellow Frog 					

KEY	 = 2 Flies
-----	--

I Can Read Picture Graphs

Colour in the frogs and complete the data table below. Remember to look carefully at the picture graph and the key.

Frog					
Total Number of Flies Eaten					

Use the data to answer the following questions:

How many flies did the green frog eat? _____

How many flies did the purple frog eat? _____

How many flies did the blue frog and the yellow frog eat altogether? _____

Which frog ate the greatest number of flies? _____

Which frog ate the least number of flies? _____

Mindfulness Challenge Cards



Squeeze all of your muscles. Firstly, can you relax your hands, then shoulders, neck, tummy, legs, feet and lastly, toes?

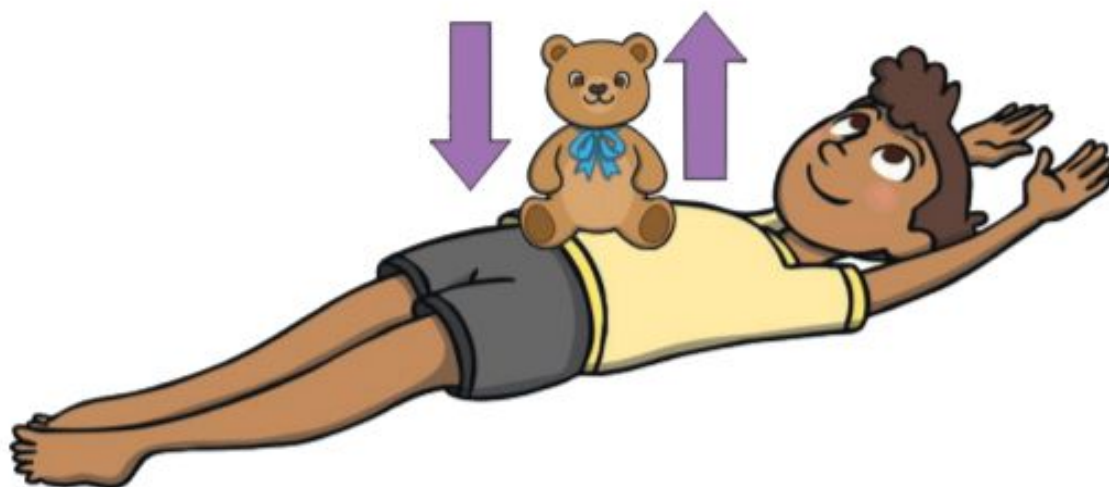


twinkl.com

Mindfulness Challenge Cards



Lie down with a teddy on your tummy. Breathe in and out. How does teddy move?



twinkl.com

